

Followings are of 2 Marks each (Q01-05).

- Q01. Two cards are drawn successively with replacement from a well shuffled pack of 52 cards. Find the probability distribution of the number of kings.
- Q02. Two integers are selected at random from the integers one to eleven. If their sum is even, what is the probability that both the numbers are even?
- Q03. Show that \bar{E} and \bar{F} are independent events, if it is known that E and F are independent events.
- Q04. If $P(A) = \frac{2}{5}$, $P(B) = \frac{1}{3}$, $P(A \cap B) = \frac{1}{5}$, then find $P(\bar{A} | \bar{B})$.
- Q05. The ratio of the number of boys to the number of girls in class XII of a school is 1:2. It is known that the probabilities of a girl and a boy getting a first division are 0.25 and 0.28 respectively. Find the probability that student chosen at random will get first division. [2 × 5 = 10]

Followings are of 3 Marks each (Q06-07).

- Q06. Let A can hit a target 4 times in 5 shots, B can hit 3 times in 4 shots and C can hit 2 times in 3 shots. Find the probability that
- (a) B, C will hit and A will lose
 - (b) Any two of A, B and C will hit
 - (c) None of them will hit.
- Q07. Two cards from a pack of 52 playing cards are lost. From the remaining cards of the pack, one card is drawn and is found to be heart. Find the probability of the lost cards were both hearts.

OR

A random variable X has the following probability distribution :

X	0	1	2	3	4	5	6	7
P(X)	0	k	2k	2k	3k	k^2	$2k^2$	$7k^2 + k$

Determine the followings :

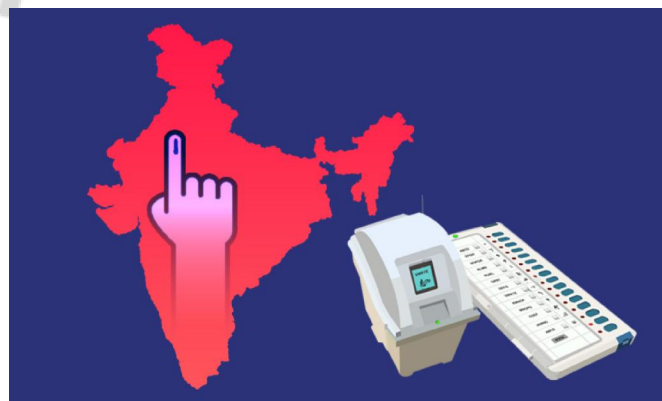
- (a) k (b) $P(X < 3)$ (c) $P(X > 6)$. [3 × 2 = 6]

Following is of 4 Marks (Q08).

- Q08. **CASE STUDY :** In a recent state election in India, there are three major political parties: Party A, Party B, and Party C. Exit polls indicate that 40% of voters support Party A, 30% support Party B, and 30% support Party C.

It is also known that the exit polls have a history of accuracy as follows.

- When the exit poll predicts Party A as the winner, it is correct 80% of the time.
- When the exit poll predicts Party B as the winner, it is correct 70% of the time.
- When the exit poll predicts Party C as the winner, it is correct 60% of the time.



Based on the above information, answer the following :

- (i) Let E be the event that the exit poll predicts Party A as the winner. Find $P(E)$.
- (ii) If the exit poll predicts Party A as the winner, what is the probability that Party A will indeed win the election? [2 × 2 = 4]

Followings are of 5 Marks each (Q09-10).

- Q09. By examining the chest X-ray, the probability that T.B. is detected when a person is actually suffering is 0.99. The probability that the doctor diagnosis incorrectly that a person has T.B. on the basis of X-ray is 0.001. In a certain city, 1 in 1000 suffers from T.B. A person is selected at random and is diagnosed to have T.B. What is the probability that he actually has T.B.?
- Q10. If a machine is set up properly, it produces 90% good items. If it is not set up properly, it produces only 40% good items. Past experience reveals that 80% of the set ups are correctly done. If after a certain set up, the machine produces 2 acceptable items, find the probability that machine was not set up properly. $[5 \times 2 = 10]$

- ① You may Share this PDF File with other Students and Teachers.
- ① You may add our WhatsApp no. 9650350480 to your groups to get Regular updates.

ORDER NOW @

Flipkart

amazon

Class XII
Based on NCERT Textbooks & Latest CBSE syllabus for 2023-24

Mathmission

- COMPLETE THEORY WITH EXAMPLES
- SUBJECTIVE TYPE QUESTIONS
- COMPETENCY FOCUSED QUESTIONS
- MULTIPLE CHOICE QUESTIONS
- ASSERTION - REASON QUESTIONS
- CASE STUDY QUESTIONS
- PASSAGE - BASED QUESTIONS

CLASS XII
FOR CBSE EXAMS (2023-24)

SOLUTIONS OF MATHMISSION

O.P. GUPTA
INDIRA AWARD WINNER

For Discounted Price Order on WhatsApp

9650350480

We have released Set of 2 Books for CBSE XII (Academic session 2023-24).

1. MATHMISSION FOR XII

- ☑ COMPLETE THEORY & EXAMPLES
- ☑ SUBJECTIVE TYPE QUESTIONS
- ☑ COMPETENCY FOCUSED QUESTIONS
 - ✦ Multiple Choice Questions
 - ✦ Assertion-Reason Questions
 - ✦ Case-Study Questions
 - ✦ Passage-Based Questions

2. SOLUTIONS OF MATHMISSION

- ☑ Step-by-step Detailed Solutions (For all Exercises of MATHMISSION)

Grab the best Seller book for X, XI & XII Maths (041) CBSE Exams.

☑ MATHMISSION FOR XII & XI

(Refresher Guide with Competency Focused Questions)

- ✦ This book is developed as per CBSE curriculum for 2023-24.

☑ CBSE 21 SAMPLE PAPERS FOR XII

☑ CBSE YODDHA SAMPLE PAPERS FOR XI

☑ CBSE UMANG SAMPLE PAPERS FOR X

(Order now at Discounted rate on WhatsApp - 9650350480)

INDIRA Award Winner O.P. GUPTA is author of several popular books on Mathematics for CBSE XII, CBSE XI, JEE & NDA. These can be bought at **Amazon & Flipkart**.

MATHEMATICIA BY O.P. GUPTA

...a name you can bank upon!



To get FREE PDF Materials, join
WhatsApp Teachers Group
by Clicking on the Logo

If you are a Student, then you may join our Students Group

CLICK HERE FOR
CLASSES
IX & X

CLICK HERE FOR
CLASSES
XI & XII

You can add our WhatsApp no. +919650350480 to your Groups also

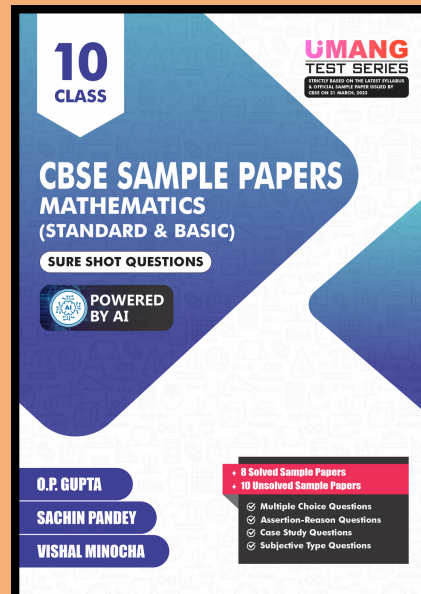
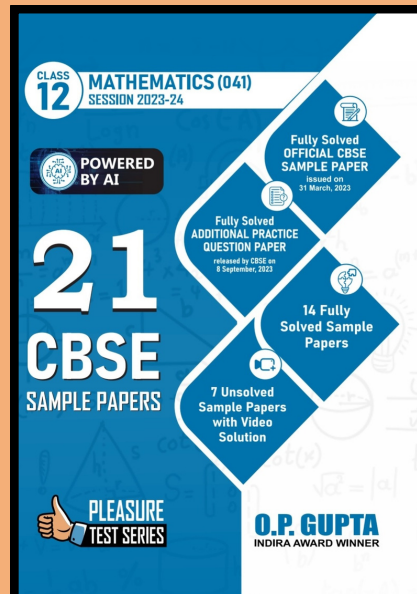
Feel Safe to Share this Document with other math scholars

CLICK NOW


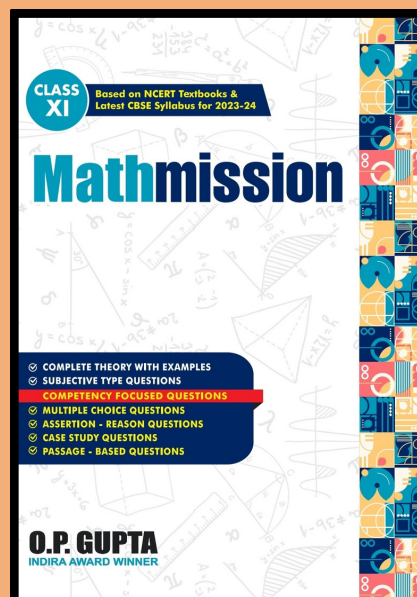
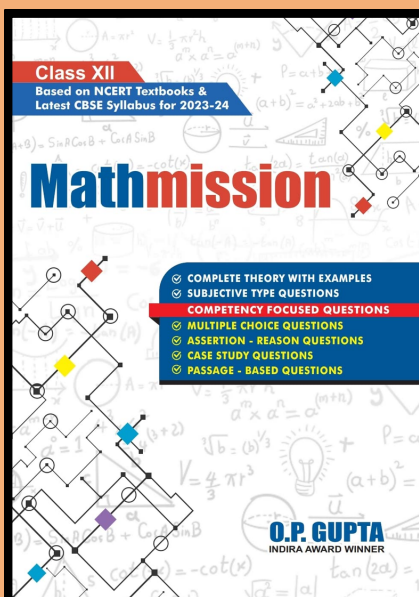
Download



**FREE PDF SAMPLE
PAPERS FOR THE
CLASSES XII, XI & X
or, just type -
bit.ly/m/theopgupta**



Click on the
Image of any
Book, to Buy it



Many Direct
Questions
from our
Books have
been asked
in the recent
CBSE Exams

Buy our
books on
amazon
Flipkart

[/theopgupta](https://www.theopgupta.com) [/theopgupta](https://www.theopgupta.com) [/theopgupta](https://www.theopgupta.com) [@theopgupta](https://www.theopgupta.com)

For Bulk Orders at Discounted Price, contact on +91-9650350480